



AP[®] Chemistry
2010 Free-Response Questions
Form B

The College Board

The College Board is a not-for-profit membership association whose mission is to connect students to college success and opportunity. Founded in 1900, the College Board is composed of more than 5,700 schools, colleges, universities and other educational organizations. Each year, the College Board serves seven million students and their parents, 23,000 high schools, and 3,800 colleges through major programs and services in college readiness, college admission, guidance, assessment, financial aid and enrollment. Among its widely recognized programs are the SAT[®], the PSAT/NMSQT[®], the Advanced Placement Program[®] (AP[®]), SpringBoard[®] and ACCUPLACER[®]. The College Board is committed to the principles of excellence and equity, and that commitment is embodied in all of its programs, services, activities and concerns.

© 2010 The College Board. College Board, ACCUPLACER, Advanced Placement Program, AP, AP Central, SAT, SpringBoard and the acorn logo are registered trademarks of the College Board. Admitted Class Evaluation Service is a trademark owned by the College Board. PSAT/NMSQT is a registered trademark of the College Board and National Merit Scholarship Corporation. All other products and services may be trademarks of their respective owners. Permission to use copyrighted College Board materials may be requested online at: www.collegeboard.com/inquiry/cbpermit.html.

Visit the College Board on the Web: www.collegeboard.com.

AP Central is the official online home for the AP Program: apcentral.collegeboard.com.

STANDARD REDUCTION POTENTIALS IN AQUEOUS SOLUTION AT 25°C

Half-reaction	E° (V)
$F_2(g) + 2e^- \rightarrow 2F^-$	2.87
$Co^{3+} + e^- \rightarrow Co^{2+}$	1.82
$Au^{3+} + 3e^- \rightarrow Au(s)$	1.50
$Cl_2(g) + 2e^- \rightarrow 2Cl^-$	1.36
$O_2(g) + 4H^+ + 4e^- \rightarrow 2H_2O(l)$	1.23
$Br_2(l) + 2e^- \rightarrow 2Br^-$	1.07
$2Hg^{2+} + 2e^- \rightarrow Hg_2^{2+}$	0.92
$Hg^{2+} + 2e^- \rightarrow Hg(l)$	0.85
$Ag^+ + e^- \rightarrow Ag(s)$	0.80
$Hg_2^{2+} + 2e^- \rightarrow 2Hg(l)$	0.79
$Fe^{3+} + e^- \rightarrow Fe^{2+}$	0.77
$I_2(s) + 2e^- \rightarrow 2I^-$	0.53
$Cu^+ + e^- \rightarrow Cu(s)$	0.52
$Cu^{2+} + 2e^- \rightarrow Cu(s)$	0.34
$Cu^{2+} + e^- \rightarrow Cu^+$	0.15
$Sn^{4+} + 2e^- \rightarrow Sn^{2+}$	0.15
$S(s) + 2H^+ + 2e^- \rightarrow H_2S(g)$	0.14
$2H^+ + 2e^- \rightarrow H_2(g)$	0.00
$Pb^{2+} + 2e^- \rightarrow Pb(s)$	-0.13
$Sn^{2+} + 2e^- \rightarrow Sn(s)$	-0.14
$Ni^{2+} + 2e^- \rightarrow Ni(s)$	-0.25
$Co^{2+} + 2e^- \rightarrow Co(s)$	-0.28
$Cd^{2+} + 2e^- \rightarrow Cd(s)$	-0.40
$Cr^{3+} + e^- \rightarrow Cr^{2+}$	-0.41
$Fe^{2+} + 2e^- \rightarrow Fe(s)$	-0.44
$Cr^{3+} + 3e^- \rightarrow Cr(s)$	-0.74
$Zn^{2+} + 2e^- \rightarrow Zn(s)$	-0.76
$2H_2O(l) + 2e^- \rightarrow H_2(g) + 2OH^-$	-0.83
$Mn^{2+} + 2e^- \rightarrow Mn(s)$	-1.18
$Al^{3+} + 3e^- \rightarrow Al(s)$	-1.66
$Be^{2+} + 2e^- \rightarrow Be(s)$	-1.70
$Mg^{2+} + 2e^- \rightarrow Mg(s)$	-2.37
$Na^+ + e^- \rightarrow Na(s)$	-2.71
$Ca^{2+} + 2e^- \rightarrow Ca(s)$	-2.87
$Sr^{2+} + 2e^- \rightarrow Sr(s)$	-2.89
$Ba^{2+} + 2e^- \rightarrow Ba(s)$	-2.90
$Rb^+ + e^- \rightarrow Rb(s)$	-2.92
$K^+ + e^- \rightarrow K(s)$	-2.92
$Cs^+ + e^- \rightarrow Cs(s)$	-2.92
$Li^+ + e^- \rightarrow Li(s)$	-3.05

ADVANCED PLACEMENT CHEMISTRY EQUATIONS AND CONSTANTS

ATOMIC STRUCTURE

$$E = h\nu \quad c = \lambda\nu$$

$$\lambda = \frac{h}{m\nu} \quad p = m\nu$$

$$E_n = \frac{-2.178 \times 10^{-18}}{n^2} \text{ joule}$$

EQUILIBRIUM

$$K_a = \frac{[\text{H}^+][\text{A}^-]}{[\text{HA}]}$$

$$K_b = \frac{[\text{OH}^-][\text{HB}^+]}{[\text{B}]}$$

$$K_w = [\text{OH}^-][\text{H}^+] = 1.0 \times 10^{-14} \text{ @ } 25^\circ\text{C}$$

$$= K_a \times K_b$$

$$\text{pH} = -\log[\text{H}^+], \text{pOH} = -\log[\text{OH}^-]$$

$$14 = \text{pH} + \text{pOH}$$

$$\text{pH} = \text{p}K_a + \log \frac{[\text{A}^-]}{[\text{HA}]}$$

$$\text{pOH} = \text{p}K_b + \log \frac{[\text{HB}^+]}{[\text{B}]}$$

$$\text{p}K_a = -\log K_a, \text{p}K_b = -\log K_b$$

$$K_p = K_c (RT)^{\Delta n},$$

where Δn = moles product gas – moles reactant gas

THERMOCHEMISTRY/KINETICS

$$\Delta S^\circ = \sum S^\circ \text{ products} - \sum S^\circ \text{ reactants}$$

$$\Delta H^\circ = \sum \Delta H_f^\circ \text{ products} - \sum \Delta H_f^\circ \text{ reactants}$$

$$\Delta G^\circ = \sum \Delta G_f^\circ \text{ products} - \sum \Delta G_f^\circ \text{ reactants}$$

$$\Delta G^\circ = \Delta H^\circ - T\Delta S^\circ$$

$$= -RT \ln K = -2.303 RT \log K$$

$$= -n\mathcal{F}E^\circ$$

$$\Delta G = \Delta G^\circ + RT \ln Q = \Delta G^\circ + 2.303 RT \log Q$$

$$q = mc\Delta T$$

$$C_p = \frac{\Delta H}{\Delta T}$$

$$\ln[A]_t - \ln[A]_0 = -kt$$

$$\frac{1}{[A]_t} - \frac{1}{[A]_0} = kt$$

$$\ln k = \frac{-E_a}{R} \left(\frac{1}{T} \right) + \ln A$$

$$E = \text{energy} \quad \nu = \text{velocity}$$

$$\nu = \text{frequency} \quad n = \text{principal quantum number}$$

$$\lambda = \text{wavelength} \quad m = \text{mass}$$

$$p = \text{momentum}$$

$$\text{Speed of light, } c = 3.0 \times 10^8 \text{ m s}^{-1}$$

$$\text{Planck's constant, } h = 6.63 \times 10^{-34} \text{ J s}$$

$$\text{Boltzmann's constant, } k = 1.38 \times 10^{-23} \text{ J K}^{-1}$$

$$\text{Avogadro's number} = 6.022 \times 10^{23} \text{ mol}^{-1}$$

$$\text{Electron charge, } e = -1.602 \times 10^{-19} \text{ coulomb}$$

$$1 \text{ electron volt per atom} = 96.5 \text{ kJ mol}^{-1}$$

Equilibrium Constants

K_a (weak acid)

K_b (weak base)

K_w (water)

K_p (gas pressure)

K_c (molar concentrations)

S° = standard entropy

H° = standard enthalpy

G° = standard free energy

E° = standard reduction potential

T = temperature

n = moles

m = mass

q = heat

c = specific heat capacity

C_p = molar heat capacity at constant pressure

E_a = activation energy

k = rate constant

A = frequency factor

Faraday's constant, \mathcal{F} = 96,500 coulombs per mole of electrons

$$\text{Gas constant, } R = 8.31 \text{ J mol}^{-1} \text{ K}^{-1}$$

$$= 0.0821 \text{ L atm mol}^{-1} \text{ K}^{-1}$$

$$= 8.31 \text{ volt coulomb mol}^{-1} \text{ K}^{-1}$$

GASES, LIQUIDS, AND SOLUTIONS

$$PV = nRT$$

$$\left(P + \frac{n^2a}{V^2}\right)(V - nb) = nRT$$

$$P_A = P_{total} \times X_A, \text{ where } X_A = \frac{\text{moles A}}{\text{total moles}}$$

$$P_{total} = P_A + P_B + P_C + \dots$$

$$n = \frac{m}{M}$$

$$K = ^\circ\text{C} + 273$$

$$\frac{P_1V_1}{T_1} = \frac{P_2V_2}{T_2}$$

$$D = \frac{m}{V}$$

$$u_{rms} = \sqrt{\frac{3kT}{m}} = \sqrt{\frac{3RT}{M}}$$

$$KE \text{ per molecule} = \frac{1}{2}mv^2$$

$$KE \text{ per mole} = \frac{3}{2}RT$$

$$\frac{r_1}{r_2} = \sqrt{\frac{M_2}{M_1}}$$

molarity, M = moles solute per liter solution

molality = moles solute per kilogram solvent

$$\Delta T_f = iK_f \times \text{molality}$$

$$\Delta T_b = iK_b \times \text{molality}$$

$$\pi = iMRT$$

$$A = abc$$

P = pressure

V = volume

T = temperature

n = number of moles

D = density

m = mass

v = velocity

u_{rms} = root-mean-square speed

KE = kinetic energy

r = rate of effusion

M = molar mass

π = osmotic pressure

i = van't Hoff factor

K_f = molal freezing-point depression constant

K_b = molal boiling-point elevation constant

A = absorbance

a = molar absorptivity

b = path length

c = concentration

Q = reaction quotient

I = current (amperes)

q = charge (coulombs)

t = time (seconds)

E° = standard reduction potential

K = equilibrium constant

OXIDATION-REDUCTION; ELECTROCHEMISTRY

$$Q = \frac{[C]^c [D]^d}{[A]^a [B]^b}, \text{ where } aA + bB \rightarrow cC + dD$$

$$I = \frac{q}{t}$$

$$E_{\text{cell}} = E_{\text{cell}}^\circ - \frac{RT}{n\mathcal{F}} \ln Q = E_{\text{cell}}^\circ - \frac{0.0592}{n} \log Q \text{ @ } 25^\circ\text{C}$$

$$\log K = \frac{nE^\circ}{0.0592}$$

Gas constant, $R = 8.31 \text{ J mol}^{-1} \text{ K}^{-1}$

$= 0.0821 \text{ L atm mol}^{-1} \text{ K}^{-1}$

$= 8.31 \text{ volt coulomb mol}^{-1} \text{ K}^{-1}$

Boltzmann's constant, $k = 1.38 \times 10^{-23} \text{ J K}^{-1}$

K_f for $\text{H}_2\text{O} = 1.86 \text{ K kg mol}^{-1}$

K_b for $\text{H}_2\text{O} = 0.512 \text{ K kg mol}^{-1}$

1 atm = 760 mm Hg

= 760 torr

STP = 0.00°C and 1.0 atm

Faraday's constant, $\mathcal{F} = 96,500$ coulombs per mole of electrons

2010 AP[®] CHEMISTRY FREE-RESPONSE QUESTIONS (Form B)

CHEMISTRY

Section II

(Total time—95 minutes)

Part A

Time—55 minutes

YOU MAY USE YOUR CALCULATOR FOR PART A.

CLEARLY SHOW THE METHOD USED AND THE STEPS INVOLVED IN ARRIVING AT YOUR ANSWERS. It is to your advantage to do this, since you may obtain partial credit if you do and you will receive little or no credit if you do not. Attention should be paid to significant figures.

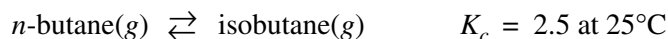
Be sure to write all your answers to the questions on the lined pages following each question in the goldenrod booklet. Do NOT write your answers on the lavender insert.

Answer Questions 1, 2, and 3. The Section II score weighting for each question is 20 percent.

1. The compound butane, C_4H_{10} , occurs in two isomeric forms, *n*-butane and isobutane (2-methyl propane). Both compounds exist as gases at 25°C and 1.0 atm.

- (a) Draw the structural formula of each of the isomers (include all atoms). Clearly label each structure.
- (b) On the basis of molecular structure, identify the isomer that has the higher boiling point. Justify your answer.

The two isomers exist in equilibrium as represented by the equation below.



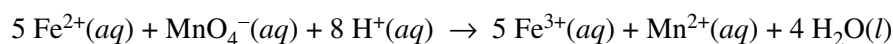
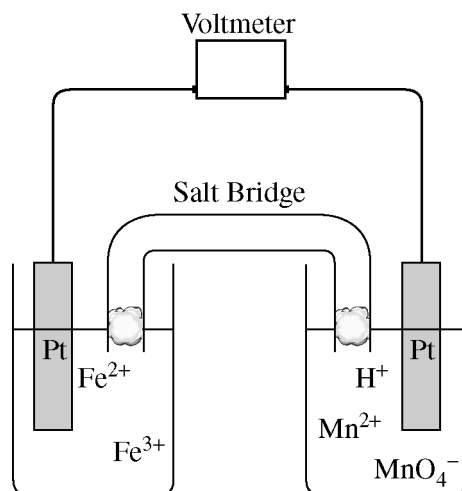
Suppose that a 0.010 mol sample of pure *n*-butane is placed in an evacuated 1.0 L rigid container at 25°C.

- (c) Write the expression for the equilibrium constant, K_c , for the reaction.
- (d) Calculate the initial pressure in the container when the *n*-butane is first introduced (before the reaction starts).
- (e) The *n*-butane reacts until equilibrium has been established at 25°C.
- (i) Calculate the total pressure in the container at equilibrium. Justify your answer.
- (ii) Calculate the molar concentration of each species at equilibrium.
- (iii) If the volume of the system is reduced to half of its original volume, what will be the new concentration of *n*-butane after equilibrium has been reestablished at 25°C? Justify your answer.

Suppose that in another experiment a 0.010 mol sample of pure isobutane is placed in an evacuated 1.0 L rigid container and allowed to come to equilibrium at 25°C.

- (f) Calculate the molar concentration of each species after equilibrium has been established.

2010 AP[®] CHEMISTRY FREE-RESPONSE QUESTIONS (Form B)



2. A galvanic cell and the balanced equation for the spontaneous cell reaction are shown above. The two reduction half-reactions for the overall reaction that occurs in the cell are shown in the table below.

Half-Reaction	E° (V) at 298 K
$\text{Fe}^{3+}(aq) + e^{-} \rightarrow \text{Fe}^{2+}(aq)$	+0.77
$\text{MnO}_4^{-}(aq) + 8 \text{H}^{+}(aq) + 5 e^{-} \rightarrow \text{Mn}^{2+}(aq) + 4 \text{H}_2\text{O}(l)$	+1.49

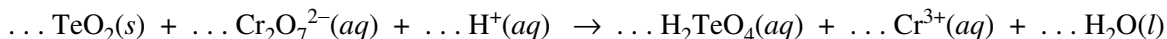
- (a) On the diagram, clearly label the cathode.
- (b) Calculate the value of the standard potential, E° , for the spontaneous cell reaction.
- (c) How many moles of electrons are transferred when 1.0 mol of $\text{MnO}_4^{-}(aq)$ is consumed in the overall cell reaction?
- (d) Calculate the value of the equilibrium constant, K_{eq} , for the cell reaction at 25°C. Explain what the magnitude of K_{eq} tells you about the extent of the reaction.

Three solutions, one containing $\text{Fe}^{2+}(aq)$, one containing $\text{MnO}_4^{-}(aq)$, and one containing $\text{H}^{+}(aq)$, are mixed in a beaker and allowed to react. The initial concentrations of the species in the mixture are 0.60 M $\text{Fe}^{2+}(aq)$, 0.10 M $\text{MnO}_4^{-}(aq)$, and 1.0 M $\text{H}^{+}(aq)$.

- (e) When the reaction mixture has come to equilibrium, which species has the higher concentration, $\text{Mn}^{2+}(aq)$ or $\text{MnO}_4^{-}(aq)$? Explain.
- (f) When the reaction mixture has come to equilibrium, what are the molar concentrations of $\text{Fe}^{2+}(aq)$ and $\text{Fe}^{3+}(aq)$?

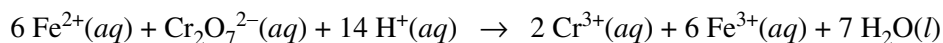
2010 AP[®] CHEMISTRY FREE-RESPONSE QUESTIONS (Form B)

3. A sample of ore containing the mineral tellurite, TeO_2 , was dissolved in acid. The resulting solution was then reacted with a solution of $\text{K}_2\text{Cr}_2\text{O}_7$ to form telluric acid, H_2TeO_4 . The unbalanced chemical equation for the reaction is given below.



- (a) Identify the molecule or ion that is being oxidized in the reaction.
- (b) Give the oxidation number of Cr in the $\text{Cr}_2\text{O}_7^{2-}(aq)$ ion.
- (c) Balance the chemical equation given above by writing the correct lowest whole-number coefficients on the dotted lines.

In the procedure described above, 46.00 mL of 0.03109 M $\text{K}_2\text{Cr}_2\text{O}_7$ was added to the ore sample after it was dissolved in acid. When the chemical reaction had progressed as completely as possible, the amount of unreacted (excess) $\text{Cr}_2\text{O}_7^{2-}(aq)$ was determined by titrating the solution with 0.110 M $\text{Fe}(\text{NO}_3)_2$. The reaction that occurred during the titration is represented by the following balanced equation.



A volume of 9.85 mL of 0.110 M $\text{Fe}(\text{NO}_3)_2$ was required to reach the equivalence point.

- (d) Calculate the number of moles of excess $\text{Cr}_2\text{O}_7^{2-}(aq)$ that was titrated.
- (e) Calculate the number of moles of $\text{Cr}_2\text{O}_7^{2-}(aq)$ that reacted with the tellurite.
- (f) Calculate the mass, in grams, of tellurite that was in the ore sample.

S T O P

**If you finish before time is called, you may check your work on this part only.
Do not turn to the other part of the test until you are told to do so.**

2010 AP[®] CHEMISTRY FREE-RESPONSE QUESTIONS (Form B)

CHEMISTRY

Part B

Time—40 minutes

NO CALCULATORS MAY BE USED FOR PART B.

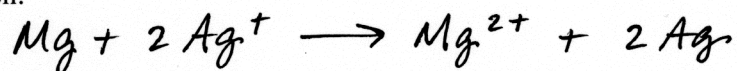
Answer Question 4 below. The Section II score weighting for this question is 10 percent.

4. For each of the following three reactions, in part (i) write a balanced equation and in part (ii) answer the question about the reaction. In part (i), coefficients should be in terms of lowest whole numbers. Assume that solutions are aqueous unless otherwise indicated. Represent substances in solutions as ions if the substances are extensively ionized. Omit formulas for any ions or molecules that are unchanged by the reaction. You may use the empty space at the bottom of the next page for scratch work, but only equations that are written in the answer boxes provided will be scored.

EXAMPLE:

A strip of magnesium metal is added to a solution of silver(I) nitrate.

(i) Balanced equation:



(ii) Which substance is oxidized in the reaction?

Mg is oxidized.

- (a) Solid copper(II) sulfate pentahydrate is gently heated.

(i) Balanced equation:

(ii) How many grams of water are present in 1.00 mol of copper(II) sulfate pentahydrate?

2010 AP[®] CHEMISTRY FREE-RESPONSE QUESTIONS (Form B)

- (b) Excess concentrated aqueous ammonia is added to a solution of nickel(II) nitrate, leading to the formation of a complex ion.

(i) Balanced equation:

(ii) Which of the reactants acts as a Lewis acid?

- (c) Methylamine (CH_3NH_2) is added to a solution of hydrochloric acid.

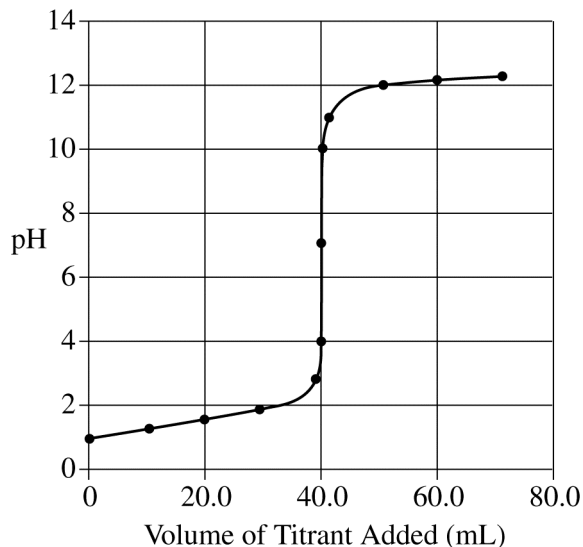
(i) Balanced equation:

(ii) Methylamine dissolves in water to form a solution. Indicate whether this solution is acidic, basic, or neutral.

2010 AP[®] CHEMISTRY FREE-RESPONSE QUESTIONS (Form B)

Answer Question 5 and Question 6. The Section II score weighting for these questions is 15 percent each.

Your responses to these questions will be scored on the basis of the accuracy and relevance of the information cited. Explanations should be clear and well organized. Examples and equations may be included in your responses where appropriate. Specific answers are preferable to broad, diffuse responses.

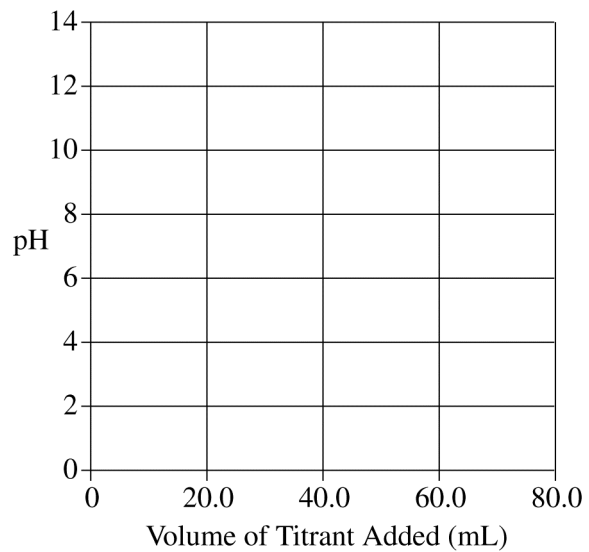


5. A solution of 0.100 *M* HCl and a solution of 0.100 *M* NaOH are prepared. A 40.0 mL sample of one of the solutions is added to a beaker and then titrated with the other solution. A pH electrode is used to obtain the data that are plotted in the titration curve shown above.
- Identify the solution that was initially added to the beaker. Explain your reasoning.
 - On the titration curve above, circle the point that corresponds to the equivalence point.
 - At the equivalence point, how many moles of titrant have been added?
 - The same titration is to be performed again, this time using an indicator. Use the information in the table below to select the best indicator for the titration. Explain your choice.

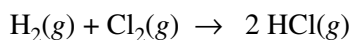
Indicator	pH Range of Color Change
Methyl violet	0 – 1.6
Methyl red	4 – 6
Alizarin yellow	10 – 12

- What is the difference between the equivalence point of a titration and the end point of a titration?
- On the grid provided on the next page, sketch the titration curve that would result if the solutions in the beaker and buret were reversed (i.e., if 40.0 mL of the solution used in the buret in the previous titration were titrated with the solution that was in the beaker).

2010 AP[®] CHEMISTRY FREE-RESPONSE QUESTIONS (Form B)



2010 AP[®] CHEMISTRY FREE-RESPONSE QUESTIONS (Form B)

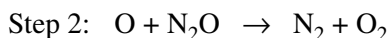


6. The table below gives data for a reaction rate study of the reaction represented above.

Experiment	Initial [H ₂] (mol L ⁻¹)	Initial [Cl ₂] (mol L ⁻¹)	Initial Rate of Formation of HCl (mol L ⁻¹ s ⁻¹)
1	0.00100	0.000500	1.82×10^{-12}
2	0.00200	0.000500	3.64×10^{-12}
3	0.00200	0.000250	1.82×10^{-12}

- Determine the order of the reaction with respect to H₂ and justify your answer.
- Determine the order of the reaction with respect to Cl₂ and justify your answer.
- Write the overall rate law for the reaction.
- Write the units of the rate constant.
- Predict the initial rate of the reaction if the initial concentration of H₂ is 0.00300 mol L⁻¹ and the initial concentration of Cl₂ is 0.000500 mol L⁻¹.

The gas-phase decomposition of nitrous oxide has the following two-step mechanism.



- Write the balanced equation for the overall reaction.
- Is the oxygen atom, O, a catalyst for the reaction or is it an intermediate? Explain.
- Identify the slower step in the mechanism if the rate law for the reaction was determined to be $\text{rate} = k[\text{N}_2\text{O}]$. Justify your answer.

STOP

END OF EXAM